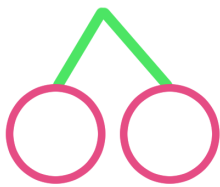
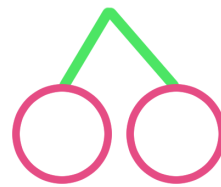


1 くふう けいさん かず か
工夫した計算を してみました。さくらんぼにも 数を書きましょう

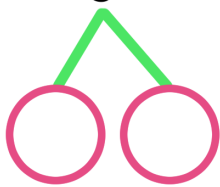
$67 + 7 = \square$



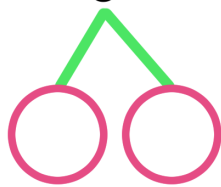
$44 + 8 = \square$



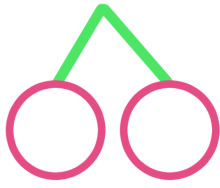
$18 + 5 = \square$



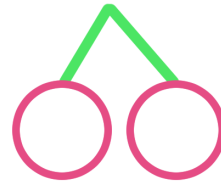
$48 + 3 = \square$



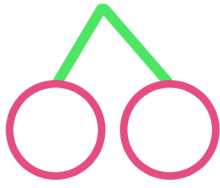
$29 + 2 = \square$



$17 + 4 = \square$



$77 + 9 = \square$



$54 + 8 = \square$

