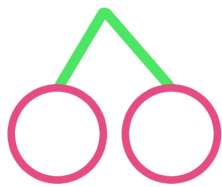
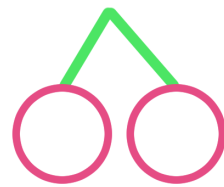


1 <sup>くふう</sup> <sup>けいさん</sup> 工夫した計算を してみました。さくらんぼにも <sup>かず</sup> <sup>か</sup> 数を書きましょう。

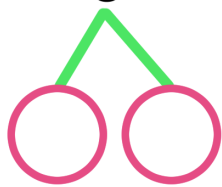
①  $9 + 3 = \square$



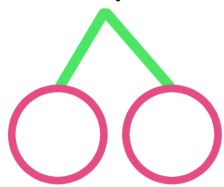
②  $6 + 7 = \square$




③  $5 + 8 = \square$



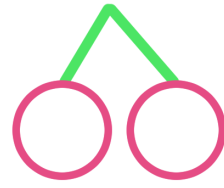
④  $7 + 4 = \square$




⑤  $3 + 8 = \square$



⑥  $6 + 9 = \square$



⑦  $8 + 8 = \square$



⑧  $9 + 5 = \square$

