



1 <sup>くふう</sup> <sup>けいさん</sup>工夫した計算を <sup>かず</sup> <sup>か</sup>してみました。さくらんぼにも <sup>かず</sup> <sup>か</sup>数を書きましょう。


①  $15 - 6 =$




②  $2 + 9 =$




③  $7 + 5 =$




④  $13 - 7 =$



⑤  $11 - 8 =$



⑥  $7 + 7 =$



2 さくらんぼを <sup>す</sup>好きに <sup>か</sup>書いて <sup>けいさん</sup>計算してみましょう。

①  $7 + 8 =$

②  $11 - 5 =$

③  $18 - 9 =$

④  $3 + 9 =$