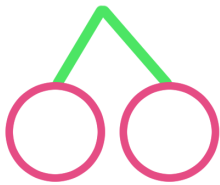
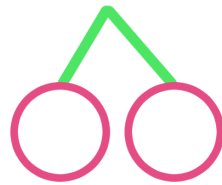


1 ^{くふう} ^{けいさん} 工夫した計算を してみました。さくらんぼにも ^{かず} ^か 数を書きましょう。

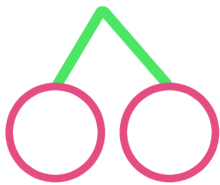
① $8 + 8 = \square$



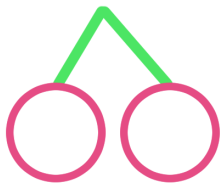
② $5 + 7 = \square$




③ $7 + 9 = \square$




④ $4 + 7 = \square$



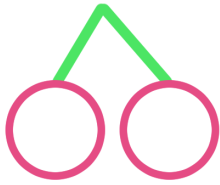
⑤ $6 + 8 = \square$



⑥ $9 + 4 = \square$



⑦ $6 + 6 = \square$



⑧ $5 + 9 = \square$

