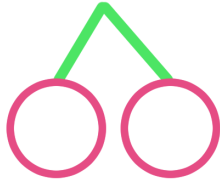



1 ^{くふう} ^{けいさん}工夫した計算を ^{かず} ^かしてみました。さくらんぼにも ^{かず} ^か数を書きましょう。

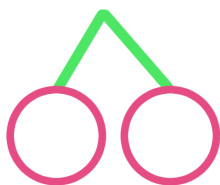
① $13 - 5 =$



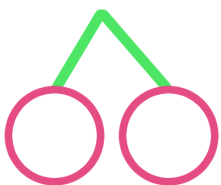
② $6 + 5 =$



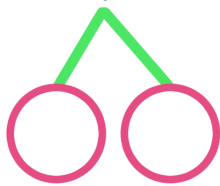
③ $14 - 8 =$




④ $9 + 9 =$



⑤ $12 - 7 =$



⑥ $7 + 5 =$



2 さくらんぼを ^す好きに ^か書いて ^{けいさん}計算してみましょう。

① $11 - 4 =$

② $13 - 5 =$

③ $4 + 8 =$

④ $7 + 7 =$