



1 ^{くふう} ^{けいさん}工夫した計算を ^{かず} ^かしてみました。さくらんぼにも ^{かず} ^か数を書きましょう。


① $6 + 6 =$




② $8 + 5 =$




③ $2 + 9 =$



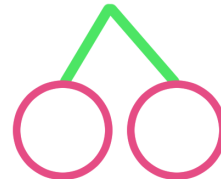
④ $15 - 7 =$



⑤ $12 - 6 =$



⑥ $16 - 8 =$



2 さくらんぼを ^す好きに ^か書いて ^{けいさん}計算してみましょう。

① $11 - 8 =$

② $5 + 7 =$

③ $14 - 7 =$

④ $7 + 8 =$